


# Reading the Time

Name: \_\_\_\_\_ Date: \_\_\_\_\_




Write the time that each clock is showing.

(1)




The time is \_\_\_\_\_.

(2)



The time is \_\_\_\_\_.

(3)



The time is \_\_\_\_\_.

(4)




The time is \_\_\_\_\_.

(5)




The time is \_\_\_\_\_.

(6)




The time is \_\_\_\_\_.

(7)




The time is \_\_\_\_\_.

(8)



The time is \_\_\_\_\_.

(9)



The time is \_\_\_\_\_.

# Reading the Time

## ANSWER KEY




Write the time that each clock is showing.

(1)




The time is 9:00.

(2)



The time is 4:00.

(3)




The time is 2:00.

(4)




The time is 11:00.

(5)




The time is 8:00.

(6)




The time is 3:00.

(7)




The time is 6:00.

(8)



The time is 10:00.

(9)



The time is 12:00.